

Fraction Circles


Home Link 3-2

NAME _____

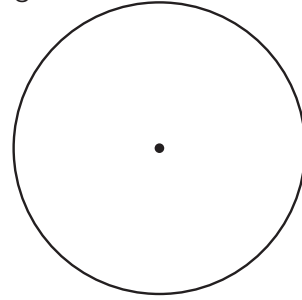
DATE _____

TIME _____


- ① Divide into 4 equal parts. Shade $\frac{1}{4}$.




- ② Divide into 8 equal parts. Shade $\frac{2}{8}$.



- ③ Divide into 12 equal parts. Shade $\frac{3}{12}$.



- ④ Create your own. Divide into equal parts and shade a portion. Record the amount you shaded.



- ⑤ What patterns do you notice in Problems 1 through 3?

Practice

- ⑥ List the next 4 multiples of 5. 20, _____, _____, _____, _____

- ⑦ List all the factors of 48. _____

- ⑧ List the factors of 48 that are composite. _____